


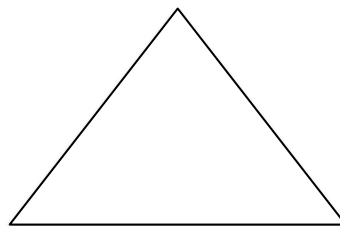
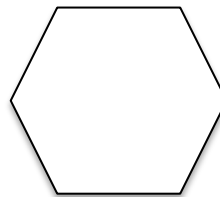

Partitioning Mini-Book

Name: _____

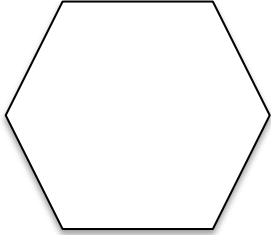


These shapes show
halves.

These shapes show
fourths.

Divide each shape to
show halves.



Divide each shape to
show fourths.



I can partition
shapes into
halves and
fourths!

